

Y6 SATs

Pie Charts


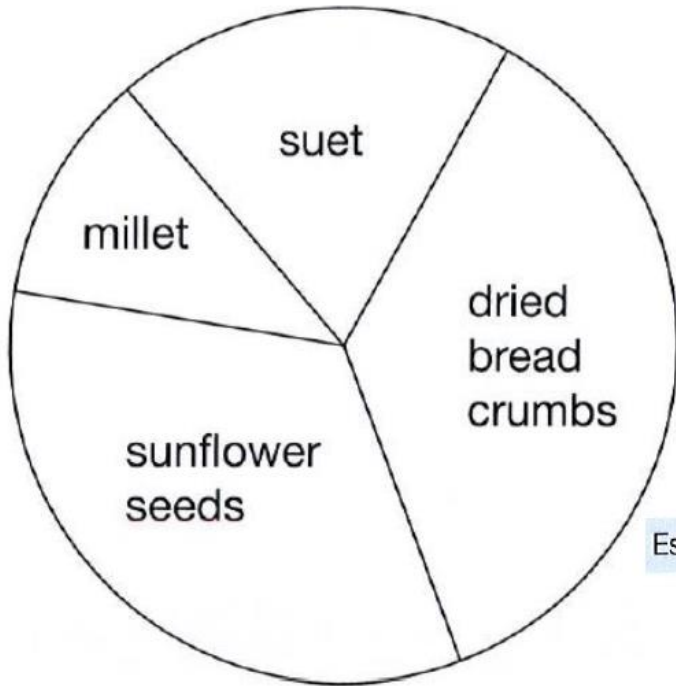
Help Code : 047

BOOSTER

RECOMMENDED! - mental maths TES resource
Interactive + Self-Marking [CLICK HERE](#)

2012A KS2 Q22

This pie chart shows the ingredients to make a food mixture for wild birds.



Estimate the **percentage** of mixture that is suet.

 %

Mina uses 100 grams of millet in the mixture.

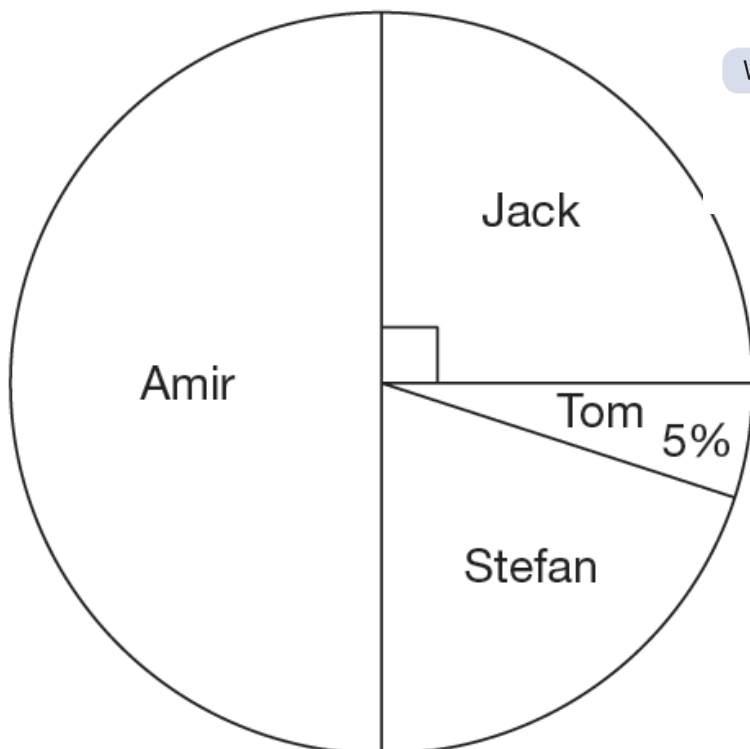
Estimate how many grams of sunflower seeds she should use.

 g

2009A KS2 Q21

40 children predicted who would win the boys' race at sports day.

This pie chart shows their predictions.



What percentage of the children predicted that Stefan would win?

 %

10 children predicted the winner of the race **correctly**.

Who won the race?

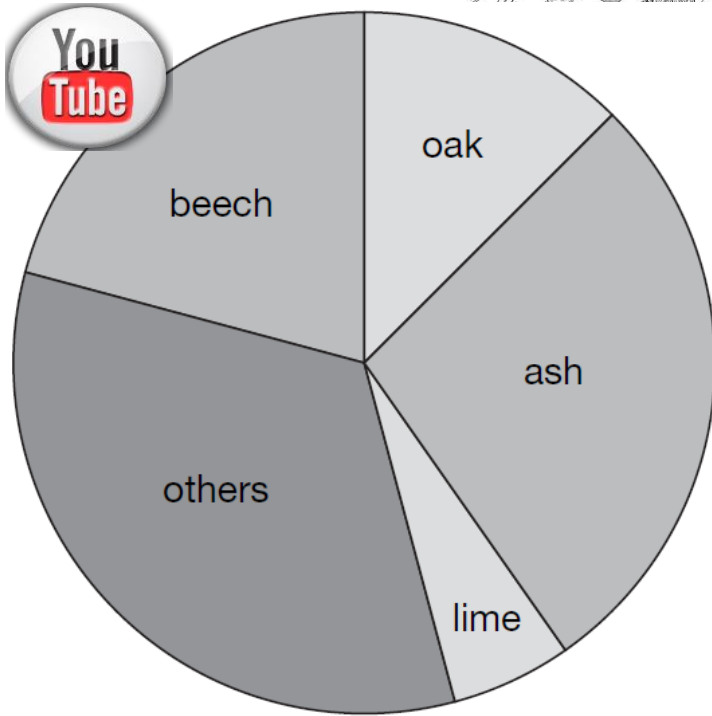


Explain how you know.



2006A KS2 Q20

Class 6 did a survey of the number of trees in a country park.
This pie chart shows their results.



Estimate the **fraction** of trees in the survey that are **oak** trees.



The children counted 60 **ash** trees.

Use the pie chart to estimate the **number** of **beech** trees they counted.



2010A KS2 Q22

A shop sells books, CDs and DVDs.

A shop sells books, CDs and DVDs.
This pie chart shows the sales of each in one week.



Estimate the **fraction** of the total sales that were DVDs.



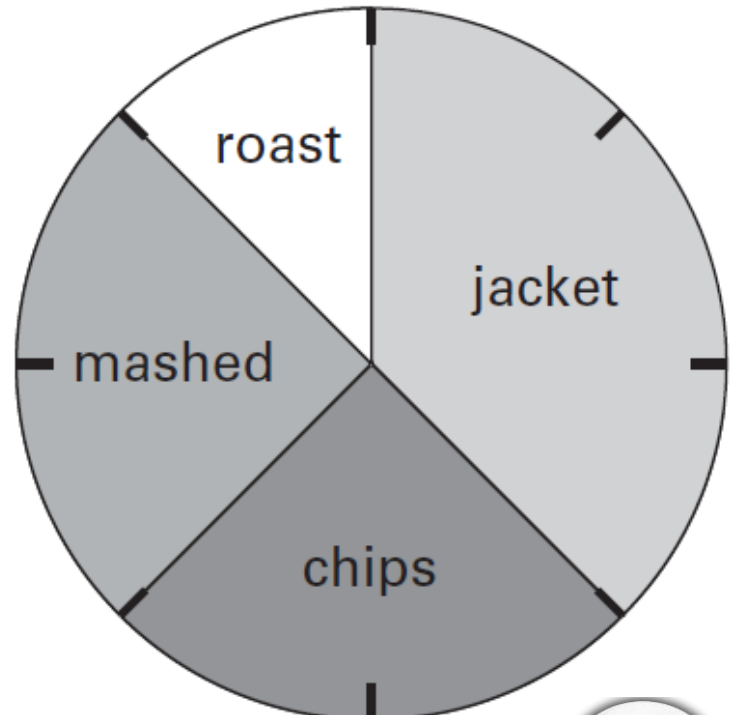
In this week, 200 **CDs** were sold.

Estimate how many books were sold.



2005A KS2 Q18

This pie chart shows how the children in Class 6 best like their potatoes cooked.



32 children took part in the survey.

Look at the four statements below.



For each statement put a tick (✓) if it is **correct**.
Put a cross (✗) if it is **not correct**.

10 children like chips best.

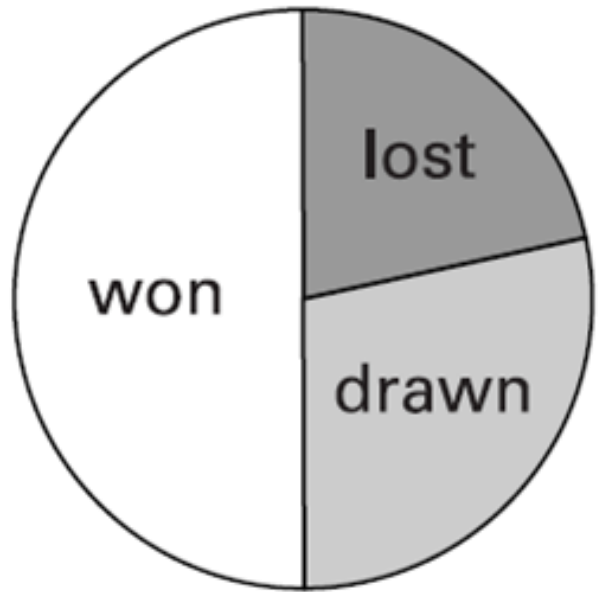
25% of the children like mashed potatoes best.

$\frac{1}{5}$ of the children like roast potatoes best.

12 children like jacket potatoes best.

2003A KS2 Q21

The pie charts show the results of a school's netball and football matches.



Netball

Football

The netball team played **30** games.
The football team played **24** games.

Estimate the percentage of games that the netball team lost.


 %

David says,

'The two teams won the same number of games.'


Is he correct?
Circle Yes or No.



Yes / No

2000A KS2 Q17

Tony and Gemma looked for snails, worms, slugs and beetles in their gardens.

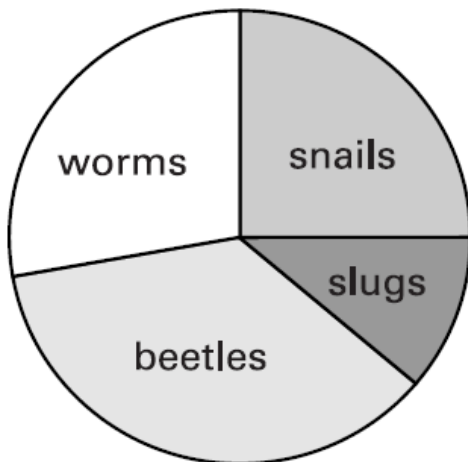


Tony's pie chart

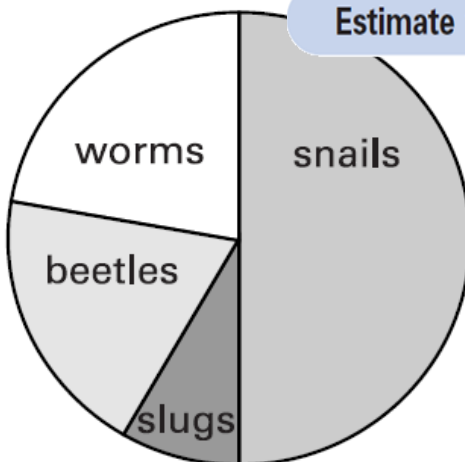
They each made a pie chart of what they found.



Gemma's pie chart



Total 80



Total 36

Estimate the number of worms that Tony found.



Who found more **snails**?
Circle Tony or Gemma.

Explain how you know.

.....
.....